



Grade: IV

Periodic Test 1

Mark:40

Name:

Social Studies

Time: 01.30 hrs.

Roll No:

Date: 18.7.25

I. Choose the correct answer

5 x 1 =5

1.The Taj Mahal is _____ .

- a. a manuscript b.an inscription c. a monument d. an artefact

2.The art of science of building is called _____ .

- a. inscription b. manuscript c. architecture d. archaeologist

3.The study of the past is called _____ .

- a. protohistory b. prehistory c. history d. prewar

4.The first day of every month of the Hijri calendar is a _____.

- a. new moon b. full moon c. crescent d. gibbous

5. A different calendar used in India is the _____.

- a. saka calendar b. Hijri calendar c. Indian national calendar d. chaitra calendar

II. Arrange the events in a chronological order. Mark them from 1-5, 1 being the earliest.

5 x 1 = 5

1.The printing press was invented in Germany in 1440 CE.

2. The telephone was invented in 1876 CE.

3. Steel was first used in Turkey in 1800 BCE.

4. The wheel was invented around 10,000 BCE.

5. Papyrus was invented in Egypt in 3000 BCE.

III. Match the following

5 x 1 =5

6. Gregorian

first month

7. Hijri

study about past

8. Saka

Christian





9. Paleontologist

Hindu

10. Muharram

Islamic

IV. Observe the images and circle the sources and objects from the past 4 x 1= 4

	<p>a. Monument</p> <p>b. Artefacts</p> <p>c. Inscriptions</p> <p>d. Manuscripts</p>	<ul style="list-style-type: none">• Archaeology• Literary
	<p>a. Monument</p> <p>b. Artefacts</p> <p>c. Inscriptions</p> <p>d. Manuscripts</p>	<ul style="list-style-type: none">• Archaeology• Literary
	<p>a. Monument</p> <p>b. Artefacts</p> <p>c. Inscriptions</p> <p>d. Manuscripts</p>	<ul style="list-style-type: none">• Archaeology• Literary
	<p>a. Monument</p> <p>b. Artefacts</p> <p>c. Inscriptions</p> <p>d. Manuscripts</p>	<ul style="list-style-type: none">• Archaeology• Literary

V. Answer the following

5 x 2 =10

20. It is important to study history, do you support the statement, why?

21. What is waxing and waning of Moon?

22. "BC/AD replaced with BCE/CE". State the reason for the statement.

23. The Taj Mahal is a monument that reflects the culture and architecture of the Mughal period. If you were an archaeologist, how would you use the Taj Mahal to learn about the people and society of that time?



24. State the difference between manuscripts and inscriptions.

VI. Answer in brief

3 x 3 = 9

25. Why is it important to preserve monuments?

26. While visiting a historical place, have you noticed that visitors littering around the monument. How would you react to it?

27. Write any three differences between solar and lunar calendar.

VII. Draw the phases of the moon.

2